


Name _____

Grade _____ Unit _____

Constructed Response Question



A True Book /China-Ann Heinrichs

1. What is the photograph?


2. What materials are used to construct these houses?

3. How are these houses different from houses in our region?

Name _____

Grade _____ Unit _____

Constructed Response Question



A True Book /China-Ann Heinrichs

1. What are these people using to eat?

2. What is the main ingredient in a Chinese meal?

3. How is a Chinese dinner different/same as an American meal?

Name _____

Grade _____ Unit _____

Constructed Response Question



Living Near A River-Allan Fowler

1. What does the picture show?

2. Why is the dam important to people who live nearby?

3. How would life be different without a dam?

Name _____

Grade _____ Unit _____

Constructed Response Question

**Using the NYSTROM United States Raised-Relief Map,
answer the following questions:**

1. What is this map of?

2. What do the raised areas on the map represent?

3. Why are most urban areas located near water?

Name _____

Grade _____ Unit _____

Constructed Response Question



A

True Book /Ireland-Brendan January

1. What country is the flag from?

2. How is the flag different and/or the same as our flag?

3. What is the importance of a country having a flag?

Name _____

Grade _____ Unit _____

Constructed Response Question

INDIA'S LARGEST CITIES



Harcourt Brace-Communities Activity Book

1. What does this map show?

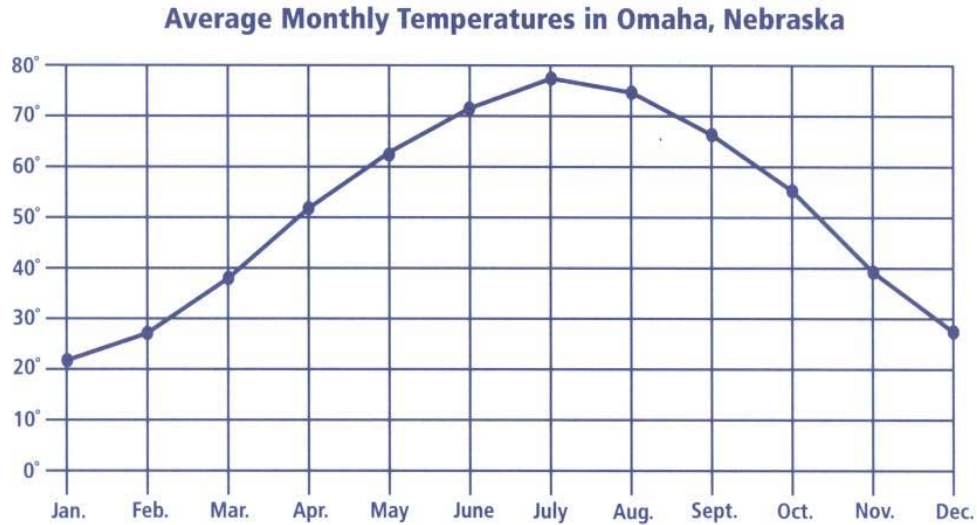
2. Using miles, what is the distance between the cities Mumbai and Calcutta?

3. What geographical features effect the economy of India? Explain.

Name _____

Grade _____ Unit _____

Constructed Response Question



Nystrom, Activity Sheet 11

1. What does the graph show?

2. What is the temperature difference between the hottest month and the coldest month?

3. How does the temperature during the month of June in Omaha, Nebraska compare to the temperature in June in Rochester, New York?

Name _____

Grade _____ Unit _____

Constructed Response Question

**Using A World of Communities, page 24,
answer the following questions:**

1. What is the official name of this country?

2. What is the capital of Russia? What percent of the population is urban?

3. What type of climate does Siberia have?

Name _____

Grade _____ Unit _____

Constructed Response Question



Most Bedouins do not drive cars or trucks because there are few roads in the desert. They ride horses or camels.

Living in a Desert-Allan Fowler

1. What animals are the people riding?

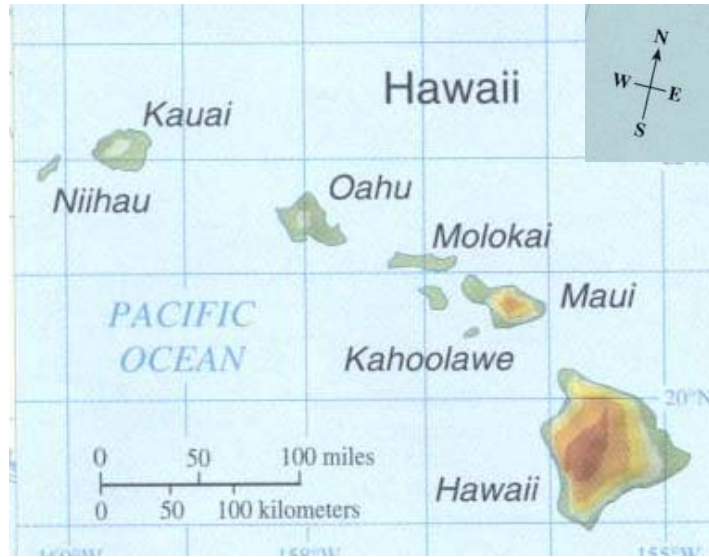
2. Why are they riding camels?

3. Using the picture describe how you know these people are in the desert region?

Name _____

Grade _____ Unit _____

Constructed Response Question



1. What state is shown in this map?

2. What is the most southern island?

3. What are the advantages or disadvantages of living on an island?
